



UNIVERSITY OF CAMBRIDGE INTERNATIONAL EXAMINATIONS
International General Certificate of Secondary Education

www.PapaCambridge.com

CHEMISTRY

0620/11

Paper 1 Multiple Choice

May/June 2010

45 Minutes

Additional Materials: Multiple Choice Answer Sheet
Soft clean eraser
Soft pencil (type B or HB is recommended)

* 9 8 2 9 8 3 9 2 7 7 *

READ THESE INSTRUCTIONS FIRST

Write in soft pencil.

Do not use staples, paper clips, highlighters, glue or correction fluid.

Write your name, Centre number and candidate number on the Answer Sheet in the spaces provided unless this has been done for you.

There are **forty** questions on this paper. Answer **all** questions. For each question there are four possible answers **A, B, C** and **D**.

Choose the **one** you consider correct and record your choice in **soft pencil** on the separate Answer Sheet.

Read the instructions on the Answer Sheet very carefully.

Each correct answer will score one mark. A mark will not be deducted for a wrong answer.

Any rough working should be done in this booklet.

A copy of the Periodic Table is printed on page 16.

You may use a calculator.

This document consists of **15** printed pages and **1** blank page.



- 1 The diagram shows a cup of tea.



Which row describes the water particles in the air above the cup compared with the water particles in the cup?

	moving faster	closer together
A	✓	✓
B	✓	x
C	x	✓
D	x	x

- 2 A fruit drink coloured orange contains a dissolved mixture of red and yellow colouring agents. One of these colouring agents is suspected of being illegal.

Which method could be used to show the presence of this illegal colouring agent?

- A** chromatography
 - B** distillation
 - C** evaporation
 - D** filtration
- 3 A student carries out an experiment to find how fast 3 cm pieces of magnesium ribbon dissolve in 10 cm³ samples of sulfuric acid at different temperatures.

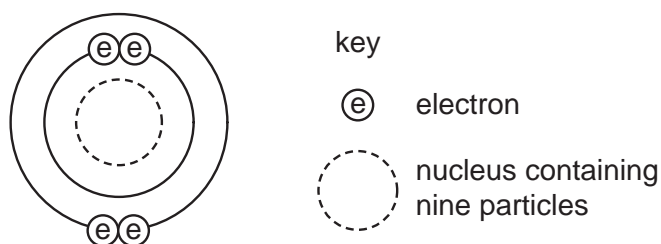
Which piece of apparatus does the student **not** need?

- A** balance
- B** measuring cylinder
- C** stop-clock
- D** thermometer

- 4 Which row shows the change that takes place when element X gains the new particle

	particle gained	change
A	electron	an isotope of element X is formed
B	electron	the element one place to the right of X in the Periodic Table is formed
C	proton	an isotope of element X is formed
D	proton	the element one place to the right of X in the Periodic Table is formed

- 5 The diagram shows an atom.



What is the proton number and neutron number of the atom?

	proton number	neutron number
A	4	5
B	4	9
C	5	4
D	5	9

- 6 The symbols of two atoms may be written as shown.



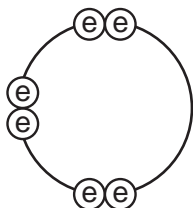
Which statement about these atoms is correct?

- A** They are different elements because they have different numbers of neutrons.
B They are different elements because they have different numbers of protons.
C They are isotopes of the same element because they have the same nucleon number.
D They are isotopes of the same element because they have the same proton number.

7 Which name is given to mixtures of metals?

- A alloys
- B compounds
- C ores
- D salts

8 Element X has six electrons in its outer shell.



key

⊕ = electron

How could the element react?

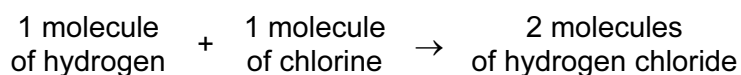
- A by gaining two electrons to form a positive ion
- B by losing six electrons to form a negative ion
- C by sharing two electrons with two electrons from another element to form two covalent bonds
- D by sharing two electrons with two electrons from another element to form four covalent bonds

9 In which compounds are pairs of electrons shared between atoms?

- 1 sodium chloride
- 2 methane
- 3 lead bromide

- A 1 only
- B 2 only
- C 1 and 3
- D 1, 2 and 3

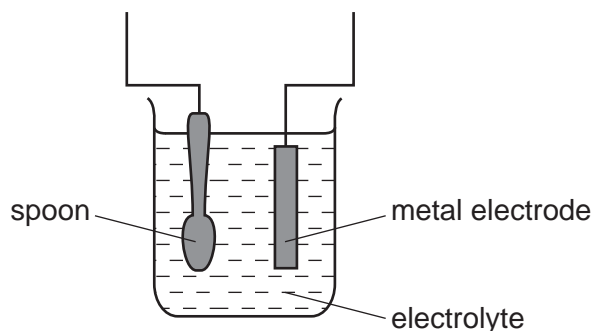
10 Hydrogen and chlorine react as shown.



What is the equation for this reaction?

- A $2\text{H} + 2\text{Cl} \rightarrow 2\text{HCl}$
- B $2\text{H} + 2\text{Cl} \rightarrow \text{H}_2\text{Cl}_2$
- C $\text{H}_2 + \text{Cl}_2 \rightarrow 2\text{HCl}$
- D $\text{H}_2 + \text{Cl}_2 \rightarrow \text{H}_2\text{Cl}_2$

- 11 The diagram shows apparatus for plating a spoon with silver.



Which statement is **not** correct?

- A** Silver would stick to the spoon because it is a very reactive metal.
B The electrolyte would be a silver salt dissolved in water.
C The metal electrode would be made from silver.
D The spoon would be connected to the negative of the power supply.
- 12 Aqueous copper(II) sulfate solution is electrolysed using inert electrodes.

Copper(II) ions (Cu^{2+}), hydrogen ions (H^+), hydroxide ions (OH^-) and sulfate ions (SO_4^{2-}) are present in the solution.

To which electrodes are the ions attracted during this electrolysis?

	attracted to anode	attracted to cathode
A	Cu^{2+} and H^+	OH^- and SO_4^{2-}
B	Cu^{2+} and SO_4^{2-}	H^+ and OH^-
C	H^+ and OH^-	Cu^{2+} and SO_4^{2-}
D	OH^- and SO_4^{2-}	Cu^{2+} and H^+

- 13 Three electrolysis cells are set up. Each cell has inert electrodes.

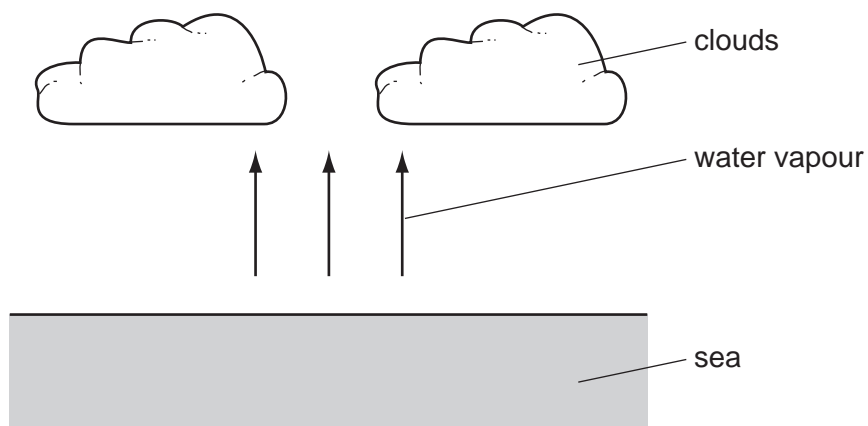
The electrolytes are listed below.

- cell 1 aqueous sodium chloride
 cell 2 concentrated hydrochloric acid
 cell 3 molten lead(II) bromide

In which cells is a gas formed at **both** electrodes?

- A** 1 and 2 **B** 1 and 3 **C** 2 only **D** 3 only

14 Clouds are formed when water vapour evaporates from the sea.



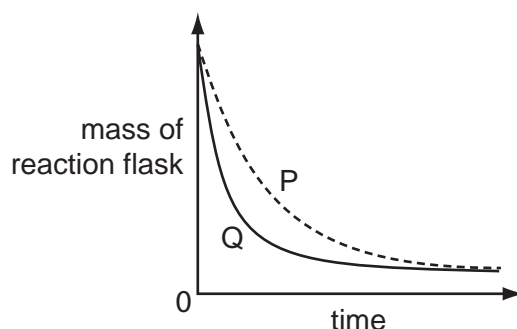
What is the energy change and what name is given to the type of change when water evaporates?

	energy change	type of change
A	energy given out	endothermic
B	energy given out	exothermic
C	energy taken in	endothermic
D	energy taken in	exothermic

15 Which process is **not** exothermic?

- A** burning a fossil fuel
- B** obtaining lime from limestone
- C** radioactive decay of ^{235}U
- D** reacting hydrogen with oxygen

- 16** A student investigates the rate of reaction between marble chips and hydrochloric acid. The loss in mass of the reaction flask is measured. The graph shows the results of two experiments, P and Q.



Which change explains the difference between P and Q?

- A** A catalyst is added in P.
B A higher temperature is used in P.
C Bigger marble chips are used in Q.
D Hydrochloric acid is more concentrated in Q.
- 17** When pink cobalt(II) sulfate crystals are heated, they form steam and a blue solid. When water is added to the blue solid, it turns pink and becomes hot. Which terms describe the pink cobalt(II) sulfate crystals and the reactions?

	pink cobalt sulfate	reactions
A	aqueous	irreversible
B	aqueous	reversible
C	hydrated	irreversible
D	hydrated	reversible

- 18** Iron is extracted from iron oxide using carbon monoxide as shown in the equation.

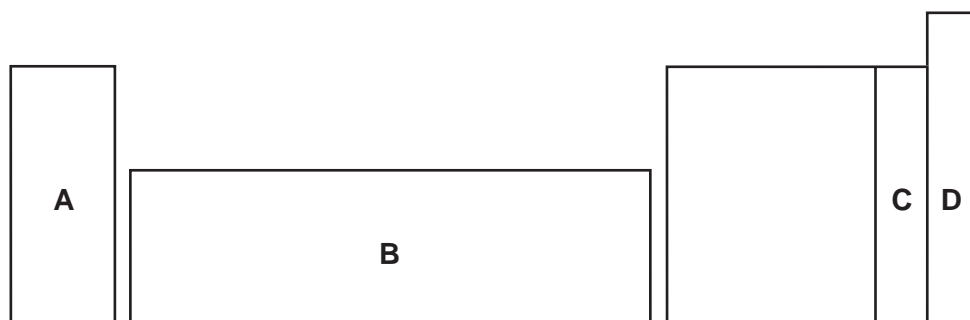


What does the equation show?

- A** Carbon monoxide is oxidised to carbon dioxide.
B Carbon monoxide is reduced to carbon dioxide.
C Iron is oxidised to iron oxide.
D Iron oxide is oxidised to iron.

25 An element does not conduct electricity and exists as diatomic molecules.

In which area of the Periodic Table is the element to be found?



26 Solutions of a halogen and a sodium halide are mixed.

Which mixture darkens in colour because a reaction occurs?

- A bromine and sodium chloride
- B bromine and sodium fluoride
- C chlorine and sodium fluoride
- D chlorine and sodium iodide

27 Copper, iron and zinc are all used as pure metals.

Which of these three metals are also used in alloys?

	copper	iron	zinc
A	✓	✓	✓
B	✓	✓	x
C	x	✓	✓
D	x	x	✓

28 Some properties of four elements are shown in the table.

Which element is a metal?

	melting point/°C	electrical conductivity when liquid	electrical conductivity when solid
A	-7	low	low
B	801	high	low
C	1535	high	high
D	3550	low	low

29 A student added dilute hydrochloric acid to four metals and recorded the results.

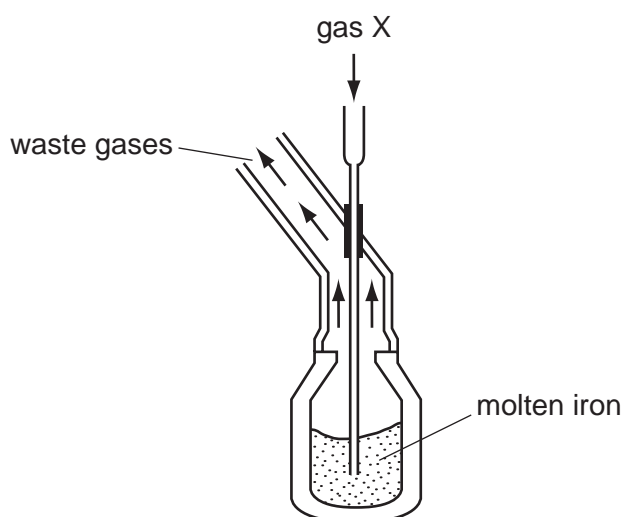
Not all of the results are correct.

	results	
	metal	gas given off
1	copper	yes
2	iron	yes
3	magnesium	no
4	zinc	yes

Which two results are correct?

- A** 1 and 3 **B** 1 and 4 **C** 2 and 3 **D** 2 and 4

30 The diagram shows the manufacture of steel.



What is gas X?

- A** carbon dioxide
B chlorine
C hydrogen
D oxygen

31 Aluminium is an important metal with many uses.

Some of its properties are listed.

- 1 It is a good conductor of heat.
- 2 It is a reactive metal.
- 3 It has a low density.
- 4 It has an oxide layer that prevents corrosion.

Which set of properties help to explain the use of aluminium for cooking and storing food?

- A** 1, 2 and 3 **B** 1, 2 and 4 **C** 1, 3 and 4 **D** 2, 3 and 4

32 Which statements about water are correct?

- 1 Water is treated with chlorine to kill bacteria.
- 2 Household water may contain salts in solution.
- 3 Water is used in industry for cooling.
- 4 Water for household use is filtered to remove soluble impurities.

- A** 1, 2 and 3 **B** 1 and 4 **C** 2, 3 and 4 **D** 1, 2, 3 and 4

33 Which compound in polluted air can damage stonework and kill trees?

- A** carbon dioxide
B carbon monoxide
C lead compounds
D sulfur dioxide

34 Which statement about methane is **not** correct?

- A** It is a liquid produced by distilling petroleum.
B It is produced as vegetation decomposes.
C It is produced by animals such as cows.
D It is used as a fuel.

35 To grow roses, a fertiliser containing nitrogen, phosphorus and potassium is needed.

For the best flowers, the fertiliser should contain a high proportion of potassium.


Which fertiliser is best for roses?

fertiliser	proportion by mass		
	N	P	K
A	9	0	25
B	13	13	20
C	29	5	0
D	29	15	5

36 The diagram shows three types of item.



cutlery



cooking pan

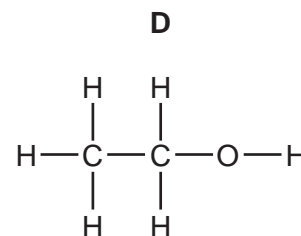
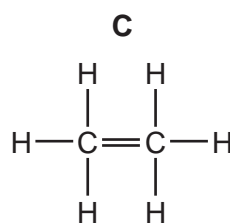
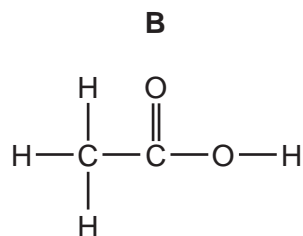
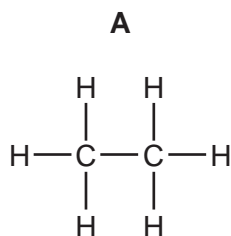


instruments used
in hospitals

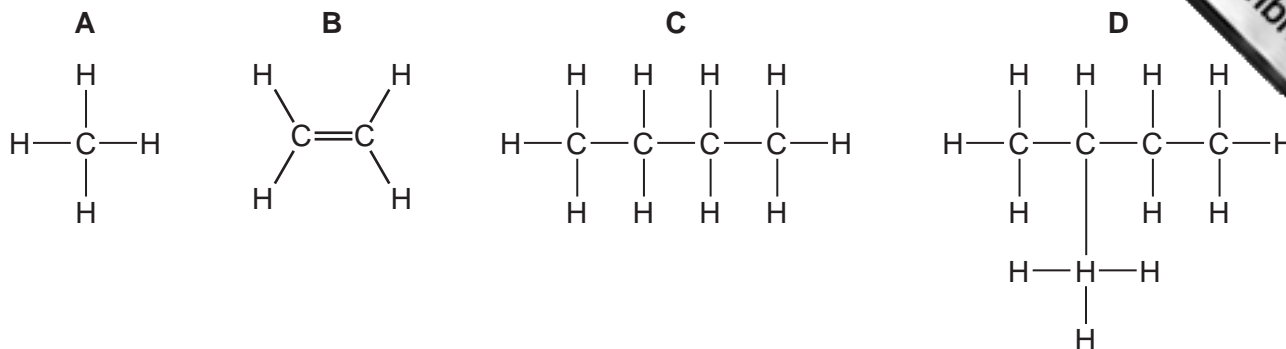
Which method of rust prevention can be used for all three types of item?

- A** coating with plastic
- B** covering with grease
- C** galvanising
- D** using stainless steel

37 Which structure is **incorrect**?



38 Which structure shows a compound that belongs to a **different** homologous series to the others?



39 A macromolecule is a very large molecule.

Macromolecules can be made by joining smaller molecules together. This is called polymerisation.

Which row in the table describes the formation of a polymer?

	monomer	polymer
A	ethane	poly(ethane)
B	ethene	poly(ethene)
C	ethane	poly(ethene)
D	ethene	poly(ethane)

40 Diesel, petrol and bitumen are all

- A** fuels.
- B** hydrocarbons.
- C** lubricants.
- D** waxes.

DATA SHEET
The Periodic Table of the Elements

		Group															
		I	II	III	IV	V	VI	VII	VIII	IX	X						
		1 H Hydrogen 1															
7	9	Li Lithium 3	Be Beryllium 4											He Helium 2	4		
23	24	Na Sodium 11	Mg Magnesium 12											Ne Neon 10	20		
39	40	K Potassium 19	Ca Calcium 20	51 V Vanadium 23	48 Ti Titanium 22	45 Sc Scandium 21	56 Fe Iron 26	59 Co Cobalt 27	59 Ni Nickel 28	64 Cu Copper 29	65 Zn Zinc 30	70 Ga Gallium 31	73 Ge Germanium 32	75 As Arsenic 33	79 Se Selenium 34	80 Br Bromine 35	84 Kr Krypton 36
85	88	Rb Rubidium 37	Sr Strontium 38	91 Zr Zirconium 40	91 Hf Hafnium 72	89 Y Yttrium 39	101 Ru Ruthenium 44	103 Rh Rhodium 45	106 Pd Palladium 46	108 Ag Silver 47	112 Cd Cadmium 48	115 In Indium 49	119 Sn Tin 50	122 Sb Antimony 51	128 Te Tellurium 52	127 I Iodine 53	131 Xe Xenon 54
133	137	Cs Caesium 55	Ba Barium 56	181 Ta Tantalum 73	178 Hf Hafnium 72	139 La Lanthanum 57	190 Os Osmium 76	192 Ir Iridium 77	195 Pt Platinum 78	197 Au Gold 79	201 Hg Mercury 80	204 Tl Thallium 81	207 Pb Lead 82	209 Bi Bismuth 83	210 Po Polonium 84	210 At Astatine 85	210 Rn Radon 86
	226	Fr Francium 87	Ra Radium 88											Ac Actinium 89			

		140	141	144	150	152	157	159	162	165	167	169	173	175
		Ce Cerium 58	Pr Praseodymium 59	Nd Neodymium 60	Sm Samarium 62	Eu Europium 63	Gd Gadolinium 64	Tb Terbium 65	Dy Dysprosium 66	Ho Holmium 67	Er Erbium 68	Tm Thulium 69	Yb Ytterbium 70	Lu Lutetium 71
		232	238	238	238	238	238	238	238	238	238	238	238	238
		Th Thorium 90	Pa Protactinium 91	U Uranium 92	Np Neptunium 93	Am Americium 95	Cm Curium 96	Bk Berkelium 97	Cf Californium 98	Es Einsteinium 99	Fm Fermium 100	Md Mendelevium 101	No Nobelium 102	Lr Lawrencium 103

		a	X	b
Key		a = relative atomic mass	X = atomic symbol	b = proton (atomic) number

*58-71 Lanthanoid series
†90-103 Actinoid series

The volume of one mole of any gas is 24 dm³ at room temperature and pressure (r.t.p.).